

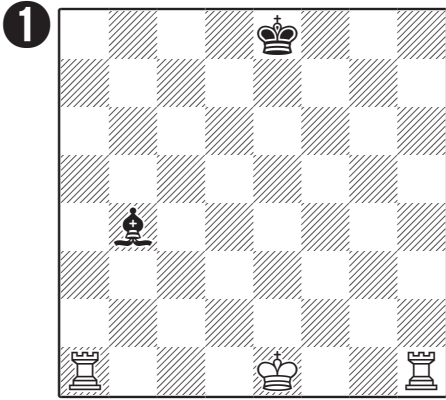
Can White castle?




In each of these pictures, it's White's turn to move. You have to decide **whether White is allowed to castle** on the kingside, on the queenside, or not at all. (Assume that a piece on its starting square hasn't moved yet.)

Once you've decided, please tick the correct box or boxes below the picture.


If white's **not allowed** to castle on one or both sides, please also draw or write the **reason** on the picture.




- White can castle kingside.
- White can castle queenside.
- White can't castle at all.




- White can castle kingside.
- White can castle queenside.
- White can't castle at all.




- White can castle kingside.
- White can castle queenside.
- White can't castle at all.




- White can castle kingside.
- White can castle queenside.
- White can't castle at all.




- White can castle kingside.
- White can castle queenside.
- White can't castle at all.




- White can castle kingside.
- White can castle queenside.
- White can't castle at all.



- White can castle kingside.
- White can castle queenside.
- White can't castle at all.



- White can castle kingside.
- White can castle queenside.
- White can't castle at all.



- White can castle kingside.
- White can castle queenside.
- White can't castle at all.